



Weekly learning pack

Year 2

English

Task 1

Here are this week's spellings to practise.

enjoyment

sadness

careful

playful

plainness

argument

merriment

happiness

plentiful

cheerful

A suffix is a group of letters that are added to the end of a word to change its meaning.

If a suffix **starts with** a consonant letter, it is usually added straight on without changing the root word.

+ment

+ness

+ful

Task 2



Key Words

beautiful unsettling
giant calm wild lovely
dangerous fantastic
scorching freezing windy
spooky magnificent quiet
noisy tense lonely

Can you write a paragraph about this setting?

Task 3

Tick the command sentence.

- I love Sports Day.
- When is Sports Day?
- Ready, steady, go!



a

Underline the nouns in this sentence.

Their uncle drove his car slowly down the long, windy lane.



c

Circle the correct homophone for each picture.



I
eye



I
eye



flower
flour



flower
flour

b

Extend this sentence using the conjunction 'if'. Write the whole new sentence in full.

I will put on my coat...



d

Write a statement sentence about this picture.



e

Oh no! Mr Whoops is getting in a muddle. Tick the sentence he should use.

- I working on the computer before lunch yesterday.
- I worked on the computer before lunch yesterday.
- I work on the computer before lunch yesterday



f

Beach Habitat

Habitats are places that plants and animals live.







What Do Animals and Plants Need from a Habitat?

food

water

shelter

What Might You Find in a Beach Habitat?

Mammals	seal 	otter 	porpoise 
Birds	puffin 	seagull 	oystercatcher 
Minibeasts	prawns 	starfish 	hermit crab 
Plants	seaweed 	marram 	sea holly 

What Could We Do to Help Look after Our Beaches?

Do:

- keep a safe distance away from animals;
- leave the shells at the beach;
- take your litter home;
- take photos of plants instead of picking them.



Task 4


Answer the questions below in full sentences.

1. What lives in a habitat?
2. What do animals and plants need?
3. What type of bird might you find at the beach?
4. What is a puffin?
5. Name two things that you could do to help look after our beaches.

Maths

Task 1: Continue to Practice Times Tables

- 3** Complete the divisions.
Use base 10 to help you.



a) $40 \div 2 = \square$ c) $40 \div 5 = \square$
 b) $40 \div 4 = \square$ d) $40 \div 10 = \square$

Did you have to make any exchanges?

- 4** 30 flowers are shared equally between 5 vases.



- a) Complete the division.

$$\square \div \square = \square$$

- b) What does each part of the division represent?
Talk about it with a partner.



- 5** Complete the divisions.

A $20 \div 5 = \square$ C $20 \div \square = 2$
 B $20 \div 4 = \square$ D $20 \div 2 = \square$

Write a letter in each box to match the divisions to the sentences.

Dora has 20 apples. She shares them equally between 4 boxes.

Ron has 20 sweets. He shares them equally between some party bags. There are 2 sweets in each party bag.

Dexter has 20 toy cars. He shares them equally between 5 boxes.

Whitney has 20 dolls. She shares them equally with her sister.

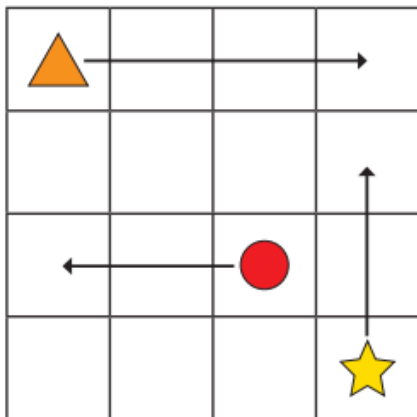
What other sentences can you think of to match the divisions?



Task 2

Describing movement

- 1 The arrows show where the shapes are moving to on the grid.



Use the word bank to help you complete the sentences.

up

left

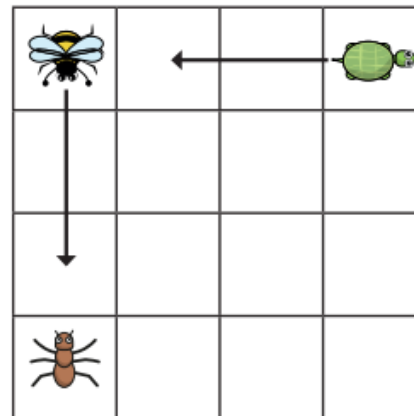
right

The triangle is moving squares _____.

The star is moving squares _____.

The circle is moving squares _____.

- 2 The arrows show where the animals are moving to on the grid.



- a) Use the word bank to help you complete the sentences.

backwards

forwards

The bee is moving squares _____.

The tortoise is moving squares _____.

- b) Draw an arrow to show the ant moving 3 squares to the right.

- c) Does it matter which way the animals are facing?



Task 3

Making patterns with shapes

1 Draw the next two shapes in each pattern.



a)

Diagram showing a sequence of four purple rectangles: tall, short, tall, short. A dashed box is provided for drawing the next two shapes.

b)

Diagram showing a sequence of four blue triangles: upright, inverted, upright, inverted. A dashed box is provided for drawing the next two shapes.

c)

Diagram showing a sequence of five shapes: orange triangle (upright), green square, orange triangle (inverted), green square, orange triangle (upright). A dashed box is provided for drawing the next two shapes.

d)

Diagram showing a sequence of six shapes: yellow rectangle, red circle, yellow rectangle, red circle, yellow rectangle, red circle. A dashed box is provided for drawing the next two shapes.

2 Tick the missing shape for each pattern.

a)

Diagram showing a sequence of six red triangles: upright, inverted, upright, (dashed box), upright, inverted. Below are four options in dashed boxes: upright, inverted, upright, inverted.

b)

Diagram showing a sequence of six green arrows: up, right, (dashed box), down, up, right. Below are four options in dashed boxes: up, right, down, left.

c)

Diagram showing a sequence of six purple pentagons: upright, (dashed box), inverted, upright, upright, inverted. Below are four options in dashed boxes: upright, inverted, upright, inverted.


What is the turn in each pattern?
Talk about it with a partner.



Task 4

True or False ?

Count money - pounds
(notes and coins)



The image shows a visual equation. On the left side, there are 10 coins: one 20p coin and nine 10p coins. In the middle is an equals sign. On the right side, there is one £20 banknote. The coins are arranged in a grid: the 20p coin is at the top left, and the 10p coins are arranged in two rows of three and a bottom row of four.

White Rose Maths

True or false? Explain your answer.

Can you make the same amount in coins for the following notes?



Curriculum (Geography)


UK and Sierra Leone

Task 1

Revise what the weather is like through the seasons in Hull




Task 1



Task 2

Use the website below to look at the seasons in Sierra Leone. Are they different to the UK?

https://kids.kiddle.co/Sierra_Leone



Sierra Leone facts for kids

[Kids Encyclopedia Facts](#)

Sierra Leone is a country in [West Africa](#). Its capital is [Freetown](#). The official language is [English](#).

The country was first made as a place where freed slaves could live. From [1991](#) until [2000](#), there was a civil war in Sierra Leone between rebels and the government. The war is now over. Sierra Leone is known for its [blood diamonds](#). These were mined and sold during the [civil war](#). This was in order to buy the weapons for the civil war.



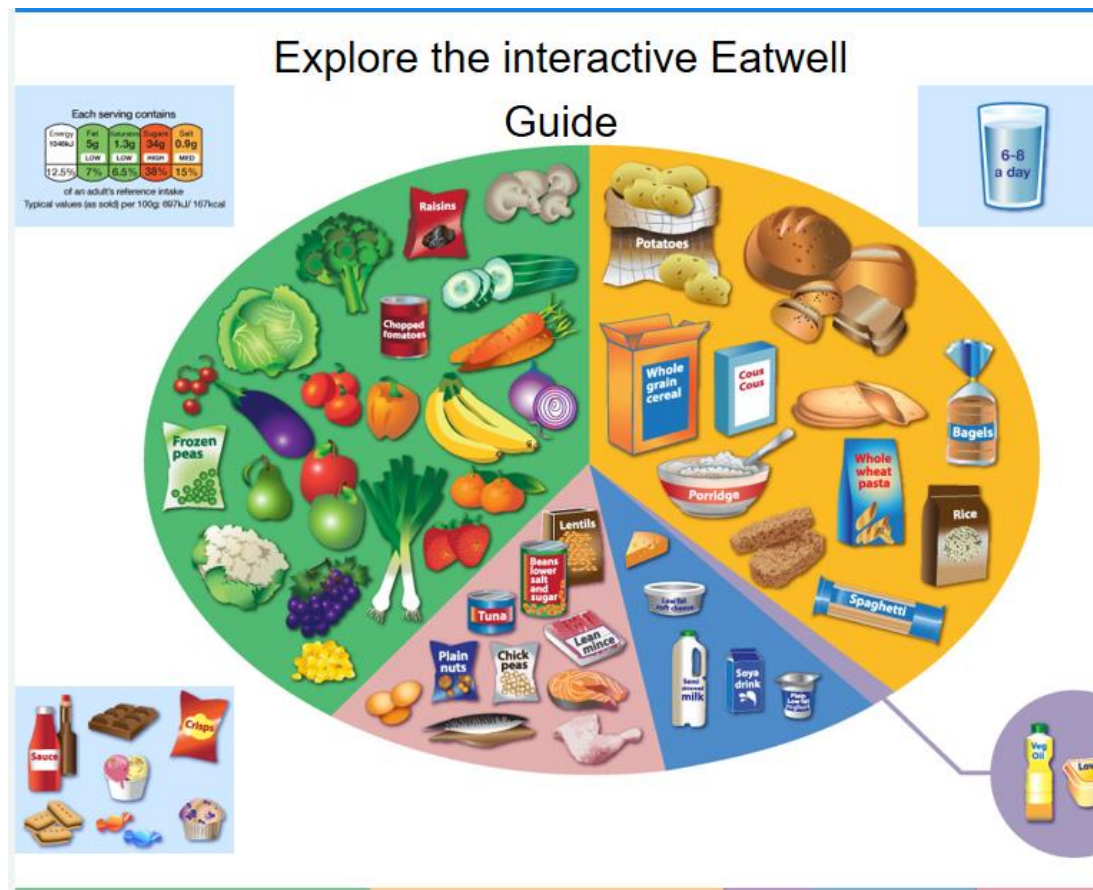
Science

Humans

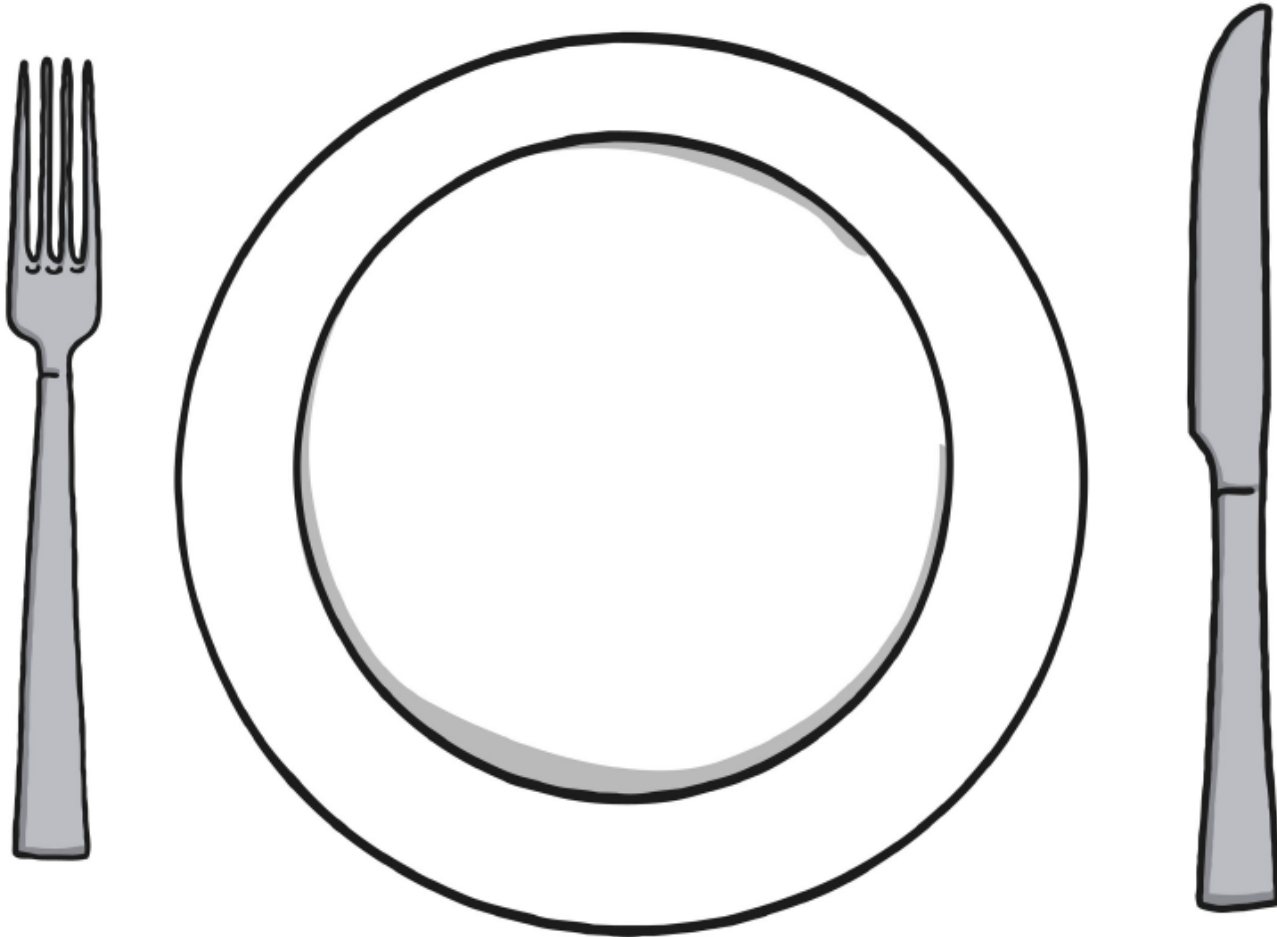
Task 1

<https://www.nhs.uk/live-well/eat-well/the-eatwell-guide/>

Use the interactive eat well plate to complete the food and plate matching activity

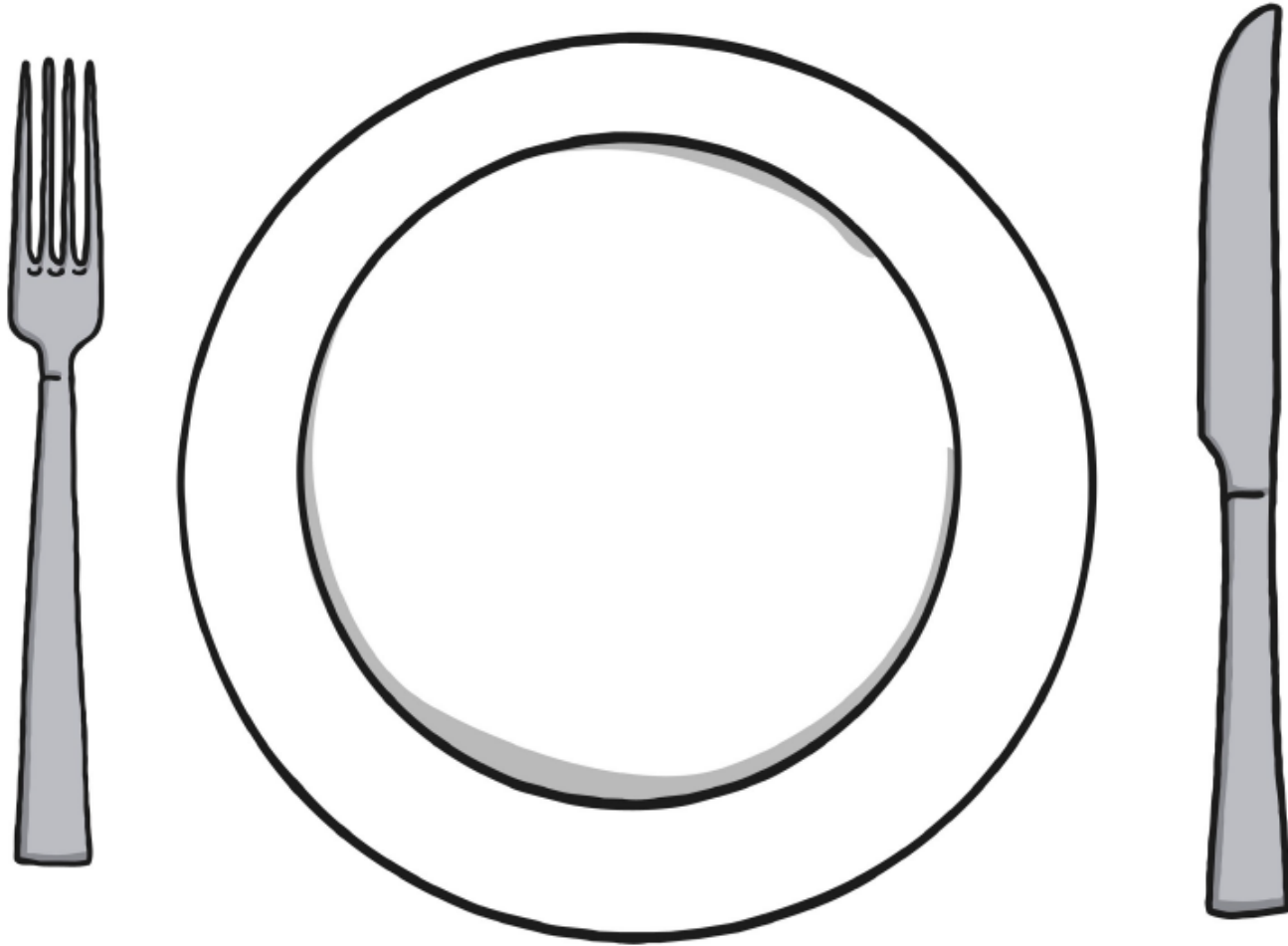


I should eat a lot of these foods!



Healthy Foods

I should only eat a little bit of these foods.



Unhealthy Foods



twinkl.co.uk



twinkl.co.uk



twinkl.co.uk



twinkl.co.uk




twinkl.co.uk



twinkl.co.uk




twinkl.co.uk




twinkl.co.uk



twinkl.co.uk



twinkl.co.uk



twinkl.co.uk



twinkl.co.uk



twinkl.co.uk




twinkl.co.uk




twinkl.co.uk



twinkl.co.uk



twinkl.co.uk




twinkl.co.uk



twinkl.co.uk




twinkl.co.uk



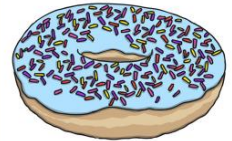
twinkl.co.uk




twinkl.co.uk



twinkl.co.uk



twinkl.co.uk



twinkl.co.uk



twinkl.co.uk



twinkl.co.uk




twinkl.co.uk



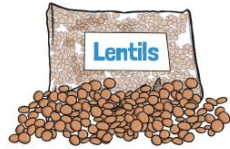
twinkl.co.uk




twinkl.co.uk



twinkl.co.uk



twinkl.co.uk



twinkl.co.uk



twinkl.co.uk



twinkl.co.uk



twinkl.co.uk